

Calcul

Calcule.

$4 \times 4 =$

$4 \times 5 =$

$4 \times 6 =$

Numération


Écris le nombre : 25 dizaines et 23 unités.


Calcul

Pose ces additions en colonne et calcule.

$342 + 358$







$299 + 543$





Calcul

Combien y a-t-il de fraises ?



$$\underline{\quad} \times \underline{\quad} = \underline{\quad}$$


Numération

Décompose les nombres.

$$124 = 100 + 20 + 4$$

$$978 =$$

$$806 =$$



Calcul

Calcule.


$$4 \times 7 =$$


$$4 \times 9 =$$

$$4 \times 10 =$$

Problème

Tirobot achète 4 paquets d'autocollants.
 Dans chaque paquet, il y a 6 autocollants.
Combien d'autocollants a Tirobot ?





Calcul

Calcule.

$10 \times 4 = \underline{\quad}$

$0 \times 4 = \underline{\quad}$

$8 \times 4 = \underline{\quad}$

Numération

Représente le nombre **845**.Tu as **25** cartes de 1Tu as **30** cartes de 10Tu as **6** cartes de 100