

Prénom : _____

Date: / /


Evaluation : Additions avec et sans retenue

Math


Opérations
Calcul mental

1 Calcule ces additions en colonne: _____


$12 + 61 =$




$43 + 28 =$




$25 + 17 =$



$27 + 32 =$



$43 + 5 =$



2 Calcule en ligne ces opérations. _____

$20 + 10 + 10 = _ _ _$

$30 + 10 + 10 = _ _ _$

$10 + 10 + 10 = _ _ _$

$30 + 10 + 30 = _ _ _$

$30 + 20 + 30 = _ _ _$

$10 + 20 + 30 = _ _ _$

$20 + 10 + 20 = _ _ _$

$20 + 50 + 20 = _ _ _$

$20 + 50 + 10 = _ _ _$

3. Calcul mental : retrait de dizaines entières : $50 - 10$



| | | | | | | | | | |
|--|--|--|--|--|--|--|--|--|--|
| | | | | | | | | | |
|--|--|--|--|--|--|--|--|--|--|

4. Calcul mental : addition de dizaines entières et d'un petit nombre : $10 + 10 + 4$; $30 + 5$

| | | | | | | | | | |
|--|--|--|--|--|--|--|--|--|--|
| | | | | | | | | | |
|--|--|--|--|--|--|--|--|--|--|

